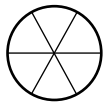


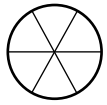
Comparaison de fractions

Séance 35

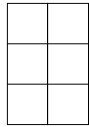
→ **Colorie** chaque fraction puis **entoure** la fraction la plus grande.



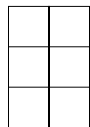
$$\frac{4}{6}$$



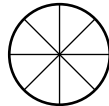
$$\frac{1}{2}$$



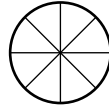
$$\frac{2}{3}$$



$$\frac{5}{6}$$



$$\frac{1}{2}$$



$$\frac{5}{8}$$

→ **Compare** avec le symbole « < », « > » ou « = ».

$$\frac{3}{10} \dots \frac{5}{10}$$

$$\frac{4}{7} \dots \frac{3}{7}$$

$$\frac{3}{6} \dots \frac{1}{2}$$

$$\frac{2}{8} \dots \frac{1}{4}$$

$$\frac{3}{4} \dots \frac{3}{3}$$

$$\frac{4}{6} \dots \frac{4}{8}$$

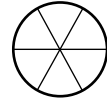
$$\frac{7}{9} \dots \frac{7}{10}$$

$$\frac{3}{4} \dots \frac{9}{12}$$

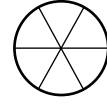
Comparaison de fractions

Séance 35

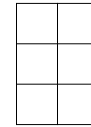
→ **Colorie** chaque fraction puis **entoure** la fraction la plus grande.



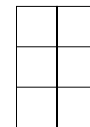
$$\frac{4}{6}$$



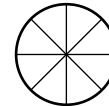
$$\frac{1}{2}$$



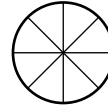
$$\frac{2}{3}$$



$$\frac{5}{6}$$



$$\frac{1}{2}$$



$$\frac{5}{8}$$

→ **Compare** avec le symbole « < », « > » ou « = ».

$$\frac{3}{10} \dots \frac{5}{10}$$

$$\frac{4}{7} \dots \frac{3}{7}$$

$$\frac{3}{6} \dots \frac{1}{2}$$

$$\frac{2}{8} \dots \frac{1}{4}$$

$$\frac{3}{4} \dots \frac{3}{3}$$

$$\frac{4}{6} \dots \frac{4}{8}$$

$$\frac{7}{9} \dots \frac{7}{10}$$

$$\frac{3}{4} \dots \frac{9}{12}$$